

Answer Book of **GENERAL KNOWLEDGE**

(واقفیت عامہ)

Grade **1**



Exercise (مشق)

1 Fill in the blanks with the help of given words.

good

eyes

hands

nose

respect

i Getting up early in the morning is a good habit.

ii We should respect our elders.

iii We touch the things with the help of our hands.

iv We smell through our nose.

v We see through our eyes.

2 Mark (✓) for correct (درست) and (✗) for incorrect (غلط) statement (بیان).

i Telling truth is not a good habit.

✗

ii Getting up early in the morning is a good habit.

✓

iii Helping others is a good habit.

✓

iv Garbage should be thrown into the dustbin.

✓

v It is not important to clean our teeth in the morning.

✗


3 Tell (بتائیں) about yourself and complete (مکمل کریں) the given sentences.

i My name is Ali.

ii I have two sister/s and three brother/s.

iii I am ten years old.

Paste your picture in the given box below.



- iv I study in class one.
- v My father's name is Ahmad.
- vi I like to eat mango.
- vii My favourite game is cricket.
- viii I want to be a/an Doctor.



4 My good habits are:

i

I always speak the truth.

ii

I respect my elders.

iii

I get up early in the morning.



5 Write names of your three friends and tell what they want to be when they grow up.

Name of my friends (میرے دوستوں کے نام)	Want to be (بڑے ہو کر بننا چاہتے ہیں)
i Shahid	Doctor
ii Abid	Teacher
iii Zain	Engineer



6 Choose (انتخاب) the correct (درست) option.

i

The taste of the chocolate is:

salty

sweet ✓

ii

Listening loud sound feels:

good

bad ✓

iii

Football looks like:

round ✓

square

iv At night things look:

dim

bright

v On touching, a wall feels:

soft

hard



7

Write answers of the following questions.

i

How do you recognize (پہچان) the colours of the things?

We recognize the colours of the things through eyes.

ii

Can you see in dark (اندھیرے)?

No, we can't see in the dark.

iii

How can you distinguish between a hard stone and a soft flower?

Hard stones are typically rough, while flowers are delicate.

iv

With which do you feel taste of things?

We feel taste of things with tongue.

v

How do you hear sounds of people and animals?

We hear sound of people and animals through our ears.

vi

What helps you smell fragrance of flowers?

We smell fragrance of flowers through our nose.



8

Write the names of colours of the following.



Grapes (انگور)

Green



Orange (نارنگ)

Orange



Mango (آم)

Yellow




Apple (سیب)

Red



9 Write the taste of the following.



Bitter gourd (کریلا)

Bitter



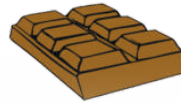
Burger (برگر)

Salty



Lemon (لیموں)

Sour



Chocolate (چاکلیٹ)

Sweet



10 Match the organs of body to their work.



Smell (سُونگھنا)


Walk (چلنا)

Hear (سُننا)


See (دیکھنا)

Taste (چکھنا)

Touch (چھونا)



11 Write hard, soft, smooth or rough in front of the following objects. You can also write two words e.g; hard and rough.



Bricks (اڻٺڻين)

Hard



Flowers (پھول)

Soft



Mirror (آئينو)


Smooth



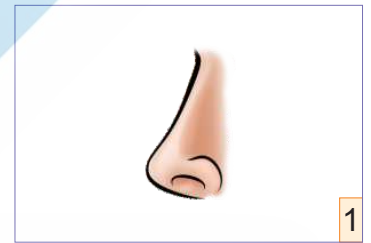
Wood (ڪڙي)

Rough

12 Complete the grid with the help of pictures.



2



1

4 T O N 1 G U E 2

O

Y

S

5

E

A

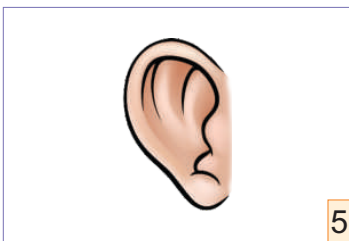
3

R


E

R

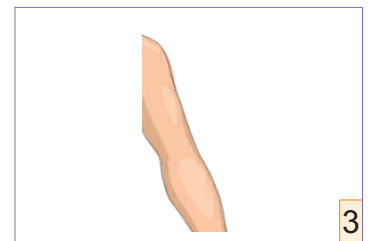
M



5



4



3

INTERNATIONAL Publishing House

Exercise (مشق)

1 Fill in the blanks with the help of given words.

soap

dirt

teeth

bath

clean

- i Taking a bath regularly keeps the body clean.
- ii It is necessary to brush our teeth daily.
- iii If nails are longer dirt gets stuck in them.
- iv To stay healthy, it is necessary to stay clean.
- v Hands should be washed with soap after using a toilet.

2 Mark (✓) in front (سامنے) of the things that are supposed to protect against diseases and (✗) in front of those supposed to cause diseases.

- i Playing in the mud.
- ii Not cleaning dirt from nails.
- iii Brushing teeth after getting up in the morning.
- iv Washing hands with soap after using toilet.
- v Eating something without washing hands after playing.

3 Write answers of the following questions.

- i **What did the doctor tell to Nasir's father?**
The doctor told that he fell ill due to unhealthy environment.

ii **What should be done to keep hands clean?**

By washing hands regularly.

iii **What are the sources of spreading any disease?**

The sources of spreading any disease are flu, dental and disease of abdomen.

iv **What kind of habit is sleeping and getting up late?**

By using mobile phone and playing games and watching movies.

v **When it is necessary to brush the teeth?**


Brush your teeth in the morning and before bed for 2 minutes each time.



4 **Complete the grid with the help of pictures.**

				N ¹					
			S ³	O	A	P			
				I					
				L					
				C ⁴	O	M	B		
				U					
				T					
				T					
				E					
			B ⁵	R	U ²	S	H		
					H				
					A				
					M				
					P				
					O				
					O				


Shampoo




2




1



4



3



5

Exercise (مشق)

1 Write the names of relations (رشتوں).

- i Father of father: Grand Father
- ii Father of mother: Grand Mother
- iii Mother of mother: Grand Mother
- iv Sister of father: Aunt
- v Younger brother of father: Uncle
- vi Elder brother of father: Paternal Uncle
- vii Mother of father: Grand Father
- viii Brother of mother: Uncle
- ix Sister of mother: Aunt

2 Fill in the blanks with the help of given words.

queue

hurt

gardener

draw

respect

- i We should respect other.
- ii We should make a queue in canteen.
- iii We should not hurt others.
- iv The gardener looks after the plants.
- v We learn to read, write and draw at school.



3 Mark (✓) in front (سامنے) of the deeds (کام) to do and (x) the deeds not to do.

- | | | |
|-----|---|---|
| i | Do not fight. | ✓ |
| ii | Wear neat and clean uniform. | ✓ |
| iii | Breaking things in school. | x |
| iv | Throwing garbage in school all around. | x |
| v | Taking other's belongings without permission. | x |



4 Choose (انتخاب) the correct (درست) option.

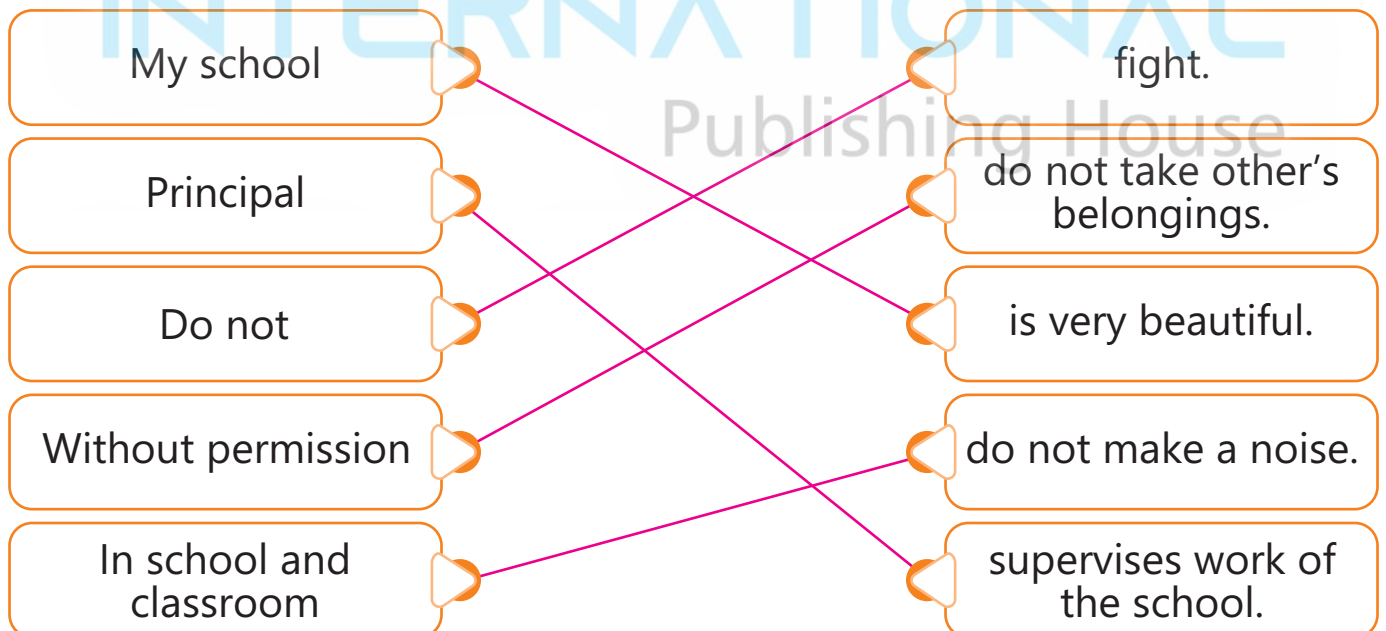
- | | | | |
|-----|------------------------------------|-----------|-----------------|
| i | My school is very: | big ✓ | small |
| ii | We should go to school: | on time ✓ | late |
| iii | Extra papers should be thrown | in a bag | in a trashbin ✓ |
| iv | School gardener takes care of the: | plants ✓ | children |
| v | School is cleaned by a: | watchman | sweeper ✓ |



5 Match column (A) to column (B) to complete the sentences.

Column (A)

Column (B)





6

Complete the grid with the help of pictures.



1

2
G
A
P
R
I
N
C
I
P
A
L
D
E
N
E
R

4
P
R
I
N
C
I
P
A
L

3
W
T
C
H
M
A
N



2



4

5
S
W
E
E
P
E
R

1
T
A
C
H
E
R



3



5

INTERNATIONAL
Publishing House

Exercise (مشق)

1 Fill in the blanks with the help of given words.

wasted

polite

punctual

soap

around

- i Always be polite.
- ii Food should not be wasted.
- iii Do not let the food drop around.
- iv Be punctual with others.
- v Wash hands with soap after using the toilet.

2 Mark (✓) in front (سامنے) of the good habits and (✗) in front of wrong statement.

- i Hands should not be washed before eating. ✗
- ii Always help others. ✓
- iii We should say Assalam-o-Alaikum when we meet someone. ✓
- iv Unhealthy food is not good for our health. ✓
- v Food on which flies (کھیاں) land (بیٹھی) should be eaten. ✗

3 Write answers of the following questions.

i How should we treat others?

- ◆ Be kind to others.
- ◆ Be polite to others.
- ◆ We should respect others.

ii **What should we say when we meet someone?**

We should say Assalam-o-Alaikum.

iii **Write three toilet etiquettes.**

- ◆ Recite prayer while entering and existing the toilet.
- ◆ Do not waste water in the toilet.
- ◆ Put right foot outside while existing the toilet.

iv **Why should we wash hands before eating?**

- ◆ Prevent the spread of illness.
- ◆ Remove germs.

v **Write three good manners.**

- ◆ Always speak the truth.
- ◆ Respect others.
- ◆ Be polite.



4 **Match column (A) to column (B) to complete the sentences.**

Column (A)

Column (B)

Always be

law.

Do your work

others.

Always respect

punctual.

Always help

elders.

Always follow

honestly.

INTERNATIONAL
Publishing House



5

Find out (تلاش کریں) the following words in the given boxes (خانوں).

- manners
- habits
- truth
- respect
- punctual
- honesty
- thanks
- kind
- help
- clean

k	i	n	d	t	p	u	n	c	t	u	a	l
r	u	h	t	h	k	i	n	d	h	u	l	a
m	r	e	s	p	e	c	t	l	a	n	e	c
a	n	l	c	t	u	a	h	c	n	k	a	l
n	a	p	n	h	e	l	p	p	k	s	n	e
n	n	k	s	r	h	o	n	e	s	t	y	a
e	e	s	p	e	c	t	k	p	l	h	e	n
r	a	h	a	b	i	t	s	e	l	c	t	s
s	b	t	r	u	t	h	c	a	n	t	h	a

Exercise (مشق)

1 Fill in the blanks with the help of given words.

exercise

help

rules

necessary

angry

i It is necessary to abide by the rules.

ii Every game has different rules.

iii For good health exercise is necessary.

iv We should not be angry if we lose.

v Always help others.

2 Mark (✓) the rules while playing a game and (✗) for a wrong statement.

i We should play together.

✓

ii Fighting over losing is a good habit.

✗

iii We should always obey the referee.

✓

iv We should wait for our turn.

✓

v We should not help others.

✗

vi We should not play honestly.

✗

vii We should accept our defeat.

✓

viii We should let others play.

✓

ix Collaboration is necessary while playing.

✓

x Making fun of others after winning is not good.

✓



Write answers of the following questions.



Why exercise and games are necessary?

Exercise and games are essential for better health of boys, girls and differently abled groups.



What benefits (فائدہ) do we gain from exercise and games?

Games increases the blood circulation in our body, make our bones strong and boost our memory we get fitness, we do not suffer, from diseases and laziness, we should spent proper time on taking exercise and on playing games.



Why it is necessary to follow the rules of the games?

Follow the rules of a game is important because:

- ◆ It makes the game fair for everyone.
- ◆ It helps keep player safe.
- ◆ It helps players learn important skills.



What do we learn (سیکھنا) by participating (حصہ لینا) in group activities?

When we play and work together in a group we learn to share and take turns.

- ◆ We learn to help each other and work together.
- ◆ We learn to talk and listen to friends.
- ◆ We learn to help each other and work together.



Write names of few different games.

Cricket, Hockey, Badminton, Football.



Write down any three rules which are followed by a good player?



Always play honestly.



Wait for your turn.



Do not pull or push anyone.



5

Complete the grid with the help of pictures.



				C ²					
				R					
3	B	A	D	M	I	N	T	O	N
				C					
				K					
			1	H					
4	F	O	O	T	B	A	L	L	
				C					
				K					
				E					
				Y					



Exercise (مشق)



1 Fill in the blanks with the help of given words.

founder

world

dignity

Pakistan

1947

i Our country is our identity in the world.ii The full name of our beloved country is Islamic Republic of Pakistan.iii Pakistan came into being on 14th August, 1947.iv Quaid-e-Azam رحمۃ اللہ علیہ is the founder of Pakistan.v Flag of Pakistan is the symbol of our dignity.

2 Mark (✓) for correct (درست) and (x) for incorrect (غلط) statement (بیان).



i Our country came into being on August 14, 1947.

✓



ii The full name of our country is Pakistan.

x



iii Our flag is the symbol of our dignity.

✓



iv There are four colours in the flag of our country.

x



v Kalimah is written on the flag of Saudi Arabia.

✓



3 Choose (انتخاب) the correct (درست) option.



i Our country came into being in:

1970

✓
1947

- ii Number of stars in the flag of our country: 1 ✓ 2
- iii There are colours in our flag: 2 ✓ 3
- iv The major part in flag of our country is: white ✓ green
- v In our flag there are: moon ✓ and a star sun and a moon

4 Match the given names of the flags with the pictures.

Pakistan (پاکستان)


China (چین)

Saudia Arabia (سعودی عرب)

The Republic of Turkiye (ترکیہ)

Malaysia (ملائیشیا)

Nepal (نیپال)



The image shows six flags on the right side, each in a separate box. From top to bottom, they are: Saudi Arabia (green with white Arabic calligraphy and a sword), Nepal (two red triangles with white borders and sun/moon symbols), China (red with five yellow stars), Malaysia (blue canton with a yellow crescent and star, and red and white horizontal stripes), Pakistan (green with a white crescent and star, and a white vertical stripe), and Turkey (red with a white crescent and star).

Exercise (مشق)

1 Fill in the blanks with the help of given words.

ship

airplane

track

bus

harbour

- i A train runs on a track.
- ii The ship sails in the sea.
- iii The ships berth on the harbour.
- iv We use airplane to travel out of the country.
- v To travel out of the city, we usually use a bus.

2 Mark (✓) for correct (درست) and (✗) for incorrect (غلط) statement (بیان).

i Train runs on a track.

✓

ii Bicycle, motorcycle and rickshaw are the fastest means of transportation.

✗

iii The place where the bus stops, is called railway station.

✗

iv We use a bus to travel from one city to another.

✓

v To travel by sea, we use a ship.

✓

3 Write answers of the following questions.

i What are the purpose of using ships?

We usually use ships to travel and for carrying goods.

ii

What is a harbour?

The place where the ships berth is called harbour.

iii

Name the place where the train stops?

Trains stops on railway station.

iv

Which activities take place on the airport?

The place where the passengers board airplane or land from the airplane is called airport.

v

What are the means of transportation?

Slow transportation: Bicycle, tonga and donkey cart are slow means of transportation.

Fast transportation: Car, wagon, motorcycle and bus are fast means of transportation.

Fastest transportation: Train, helicopter and airplane are fastest means of transportation.



4

Choose (درست) the correct (انتخاب) option.

i

It is the fastest mean of transportation:

airplane ✓

cycle

ii

We use to go other city.

bus ✓

rickshaw

iii

The slowest mean of transportation is:

bicycle ✓

train

iv

It is used to travel within a city:

ship

motorcycle ✓

v


It is used to travel from one country to another.

wagon

airplane ✓



5 Complete the grid with the help of pictures.



1



2



3

1
T

4 C A R

A


2 S

5 R I C K S H A W 3

N

I

A



4

P

G

O

N



5

INTERNATIONAL
Publishing House

Exercise (مشق)



1 Fill in the blanks with the help of given words.

non living thing

food

grow

living thing

breathe

i

Living things eat food.

ii

A plant can grow in size.

iii

A parrot is a living thing.

iv

Living things can move, breathe and grow.

v

A book is a non living thing.

2 Mark (✓) for correct (درست) and (✗) for incorrect (غلط) statement (بیان).

i

Animals, birds and humans are living things.

✓

ii

Table, chair, toys, etc. are non-living things.

✗

iii

Living things grow in size.

✗

iv

Non-living things can move from one place to another.

✗

v

Non-living things need food.

✗



3 Write answers of the following questions.

i

Can living things move from one place to another?

Yes, living things move from one place to another.

ii

Do living things need food?

Yes, living things need food.

iii **Which things breathe?**

Living things can breathe.


iv **Which things have babies?**

Table, chair, book, pen, clock.


v **Which things do not need food?**

Non-living things don't need food.

4 **Complete the grid with the help of pictures.**



		D								
		T	O	Y						
			L							
			P							
		C	H	A	I	R				
							H			
		M	O	N	K	E	Y			
							N			



5 **Paste or draw picture of one living and one non living thing below in the given space.**

Living thing

Non living thing

INTERNATIONAL
Publishing House

Exercise (مشق)



1 Fill in the blanks with the help of given words.

shrubs

oxygen

life

shelter

furniture

- i Plants and trees are very important part of our life.
- ii Medium sized plants are called shrubs.
- iii Plants provide us oxygen.
- iv Wood is used to make furniture.
- v Birds and animals use plants as a shelter.



2 Mark (✓) for correct (درست) and (✗) for incorrect (غلط) statement (بیان).

- i There are different kinds of plants.
- ii Plants provide shelter to birds and animals.
- iii We get food from plants.
- iv We should cut trees.
- v We should not water the plants on time.



3 Write answers of the following questions.

i

What are herbs?

Plants stems are weak they are called herbs.

ii **What are trees?**

The plants whose stems are strong and they are very high are called trees.

iii **What are shrubs?**

Medium sized plants are called shrubs.

iv **What do we get from the plants?**

They provide us shade and Oxygen.

v **Which food do we get from plants?**

We get grains, pulses, fruits and vegetables from plants.



5 **Find out (حلاش کریں) the following words in the given boxes (خانوں).**

plants	wood	herbs	shrubs	oxygen
flower	leaves	stem	shade	vegetable

p	l	oxygen					s	s	p	
a	n	o	e	h	a	d	e	v	h	l
t	f	w	r	shade			r	a		
h	l	d	b	t	e	a	b	l	u	n
w	o	o	d	f	r	l	o	w	b	t
p	w	x	r	l	b	u	s	h	s	s
l	e	leaves			s	h	t	a	d	e
g	r	y	e	n	e	b	e	v	e	s
s	t	e	h	r	o	x	m	y	g	n
m	u	vegetable								

Exercise (مشق)

1 Mark (✓) for correct (درست) and (x) for incorrect (غلط) statement (بیان).

- | | | |
|-----|--|-------------------------------------|
| i | Wild animals are not dangerous. | <input type="checkbox"/> |
| ii | Lion eats only meat. | <input checked="" type="checkbox"/> |
| iii | Hen, cow, goat are domestic animals. | <input checked="" type="checkbox"/> |
| iv | We can keep wild animals at home. | <input type="checkbox"/> |
| v | Plants provide shelter to the birds and animals. | <input checked="" type="checkbox"/> |

2 Choose (انتخاب) the correct (درست) option.

- | | | | |
|-----|-------------------------------|----------|-----------|
| i | It is a bird: | lion | pigeon ✓ |
| ii | It is a wild animal: | goat | cheetah ✓ |
| iii | It lives in water: | elephant | fish ✓ |
| iv | It lives in desert: | hen | camel ✓ |
| v | It eats both meat and plants: | bear ✓ | lion |

3 Write answers of the following questions.

- i **What are domestic animals?**
Animals that people keep at homes are called domestic animals.
- ii **What are wild animals?**
Some animals are dangerous they are called wild animals.

iii **Which animals are the sources of transportation?**

Horse, donkey cart, bull cart.

iv **What do we get from animals?**

We get meals and milk from animals.

v **How should we take care of animals?**

- ◆ Give clean water to animal.
- ◆ Take care of food of animals.
- ◆ Do not hurt and hit the animals.

4 **Complete the grid with the help of pictures.**

1 BEAR

2 CROCODILE

3 ZEBRA

4 HORSE

5 DONKEY

6 LION

7 CHICKEN

8 CAMEL

9 FOX

10 GOAT

Exercise (مشق)

1 Fill in the blanks with the help of given words.

pull

close

force

moved

far away

- i Things can be moved by push and pull.
- ii Things come close to us on pulling.
- iii Things move far away on pushing.
- iv Push and pull is a force.
- v We push or pull the things while we do different work.

2 Mark (✓) for correct (درست) and (✗) for incorrect (غلط) statement (بیان).

- i Push and pull is a force.
- ii When we pull something, it moves far away.
- iii When we push something, it comes close to us.
- iv A horse pushes a tonga.
- v A football at rest moves when we kick it.

✓

✗

✗

✓

✓

3 Write answers of the following questions.

i What is a force?

Push and Pull is a force.

ii **What happens when we push things?**

Things go far when we push them.

iii **What happens when we pull things?**

When we pull things, things go far.

iv **How did vehicles move in past?**

In past, the vehicles were moved with the go far help of human beings and animals.

v **Can we see the force?**

No, we can't see the force.



INTERNATIONAL

Publishing House

Exercise (مشق)

1 Fill in the blanks with the help of given words.

brightness

water

planet

a year

stars

- i The Earth is a planet.
- ii The brightness of the Sun is high.
- iii Most of the part of the Earth consists of water.
- iv There are innumerable stars at the sky
- v The Earth completes one circle around the Sun within a year.

2 Mark (✓) for correct (درست) and (✗) for incorrect (غلط) statement (بیان).

- i The shape of the Earth is round.
- ii Most part of the Earth consists of land.
- iii The Sun revolves around the Earth.
- iv The Moon appears in the sky at night.
- v Two third part of the Earth is covered with water.

3 Write answers of the following questions.

i How much part of the Earth consists of water?

Two third part of the Earth consists of water.

ii Which celestial objects are visible in the sky at night?

Moon, visible in the sky at night.

iii Which celestial objects are visible in the sky at day time?

Sun, visible in the sky at day time.

4 Choose (انتخاب) the correct (درست) option.

- i Our Earth revolves around the: Sun Moon
- ii At night, we see in the sky: Moon Sun
- iii During day, the Earth gets light from the: Sun Moon
- iv The shape of the Earth is: square round
- v The part of the Earth consists of land: One third Two third

5 Find out (تلاش کریں) the following words in the given boxes (خانے).



sky moon sun star

s	t	a	r	m	s
k	n	o	n	s	u
y	u	m	o	o	n
k	y	n	t	o	m
s	u	a	s	u	n